

**PARUL UNIVERSITY**  
**FACULTY OF MANAGEMENT**  
**BBA Mid semester 2019 - 20 Examination**

Semester: 4  
 Subject Code: 06193257  
 Subject Name: CDC [Maths -English]

Date: 07/03/2020  
 Time: 10.00 to 12.00  
 Total Marks: 10 (CDC) +30 (Maths) = 40

Student's Name: \_\_\_\_\_ Enrollment No: \_\_\_\_\_ Div. \_\_\_\_\_  
 Student's sign: \_\_\_\_\_ Invigilator's Sign: \_\_\_\_\_

**Instructions**

1. All questions are compulsory.
2. Figures to the right indicate full marks.

**Q.1 Answer the following MCQs. (Each of ONE mark)** (10)  
 (Use blue/black ball point pen to darken the circle as your correct answer on the OMR sheet provided on the last page.)

1. DISTANCE: MILE

- A liquid:litre    B bushel: corn    C weight: scale    D fame:television    E None of these

2. If CALM is written as AYJK, YEAR may be written as

- A WCYP    B WCXP    C CWXP    D PWXY    E WCYN

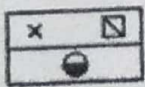
3. If water is called food, food is called tree, tree is called sky, sky is called wall, which gives a fruit?

- A sky    B tree    C food    D water    E None of these

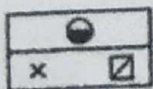
4. If in a certain language, MADRAS is coded as NBESBT, how is BOMBAY coded in that code?

- A CPNCBZ    B CPNCBX    C CPOCBZ    D CQOCBZ    E None of these

5. Choose the correct water - image of the fig. (x) from the given four figures.




(x)




(a)

A




(b)

B



(c)

C



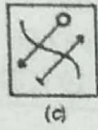
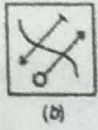
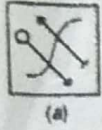
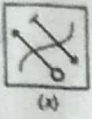
(d)

D

6. Election: Manifesto:: Meeting : ?

- A Circular    B Preface    C Agenda    D Cart    E None of these

7. Choose the correct water - image of the fig. (x) from the given four figures.

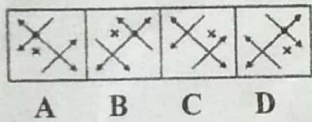
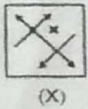


8. Which among the following illustration specifies the correct mirror image of P E R F E C T I O N ?






(a) NOITCEFERP  
(c) NOITCEFRER

(b) RPEFECTION  
(d) ERPFECTIION

9. Choose the alternative of fig. (x) Which most closely resembles the mirror-image of the given figures.



10. Find out from the following alternatives (of figure X) as to how the pattern would appear when the transparent sheet is folded at the dotted line.



X

A

B

C

D

### OMR Sheet

Q. No	A	B	C	D	E		Q. No	A	B	C	D	E
1	<input type="radio"/>	<input type="radio"/>	<input type="radio"/>	<input type="radio"/>	<input type="radio"/>		6	<input type="radio"/>	<input type="radio"/>	<input type="radio"/>	<input type="radio"/>	<input type="radio"/>
2	<input type="radio"/>	<input type="radio"/>	<input type="radio"/>	<input type="radio"/>	<input type="radio"/>		7	<input type="radio"/>	<input type="radio"/>	<input type="radio"/>	<input type="radio"/>	<input type="radio"/>
3	<input type="radio"/>	<input type="radio"/>	<input type="radio"/>	<input type="radio"/>	<input type="radio"/>		8	<input type="radio"/>	<input type="radio"/>	<input type="radio"/>	<input type="radio"/>	<input type="radio"/>
4	<input type="radio"/>	<input type="radio"/>	<input type="radio"/>	<input type="radio"/>	<input type="radio"/>		9	<input type="radio"/>	<input type="radio"/>	<input type="radio"/>	<input type="radio"/>	<input type="radio"/>
5	<input type="radio"/>	<input type="radio"/>	<input type="radio"/>	<input type="radio"/>	<input type="radio"/>		10	<input type="radio"/>	<input type="radio"/>	<input type="radio"/>	<input type="radio"/>	<input type="radio"/>